

Eastman Nature and Wildlife Habitat Center

Mapping Nature

Your Name



Site Survey Data Sheet

Date _____ Time _____

Location _____



Air Temperature


Measure the air temperature in the shade of the trees.

Air Temperature _____ Celsius

Air Temperature _____ Fahrenheit

My Weather

Circle the picture that best describes the weather today.



Wind Direction

What direction is the wind coming from?

The wind is coming from the _____.
North, South, East, or West



Meter Map


On the forest floor, mark off (use sticks on the ground to mark the corners) a square meter and outline the area with string. Draw a bird's eye view map of the objects and organisms found inside your square meter.

Draw your map
here.



Forest Map

At the creek crossing, draw a map of the area. Be sure to include the creek and nature trail in your forest map.



Tree Map

Draw a map in the space below that shows the movement patterns of animals in the tree.



Map Symbols

Create a symbol for each of the following objects you observe in the forest.

Tree

Creek

Pond

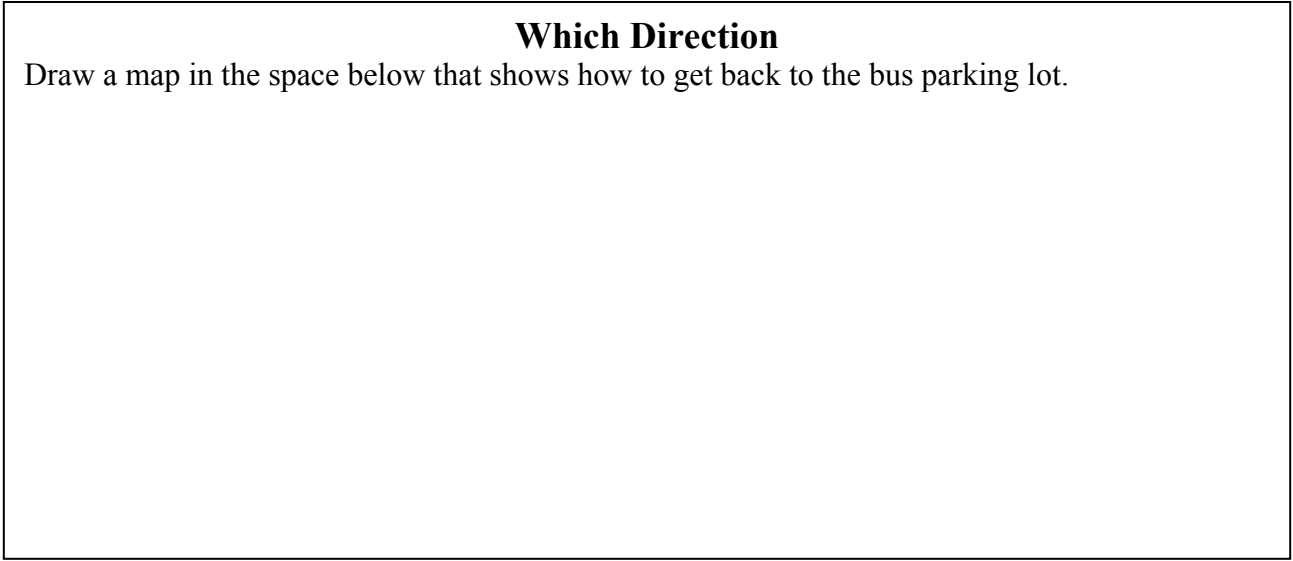
Grass

Trail

Hill

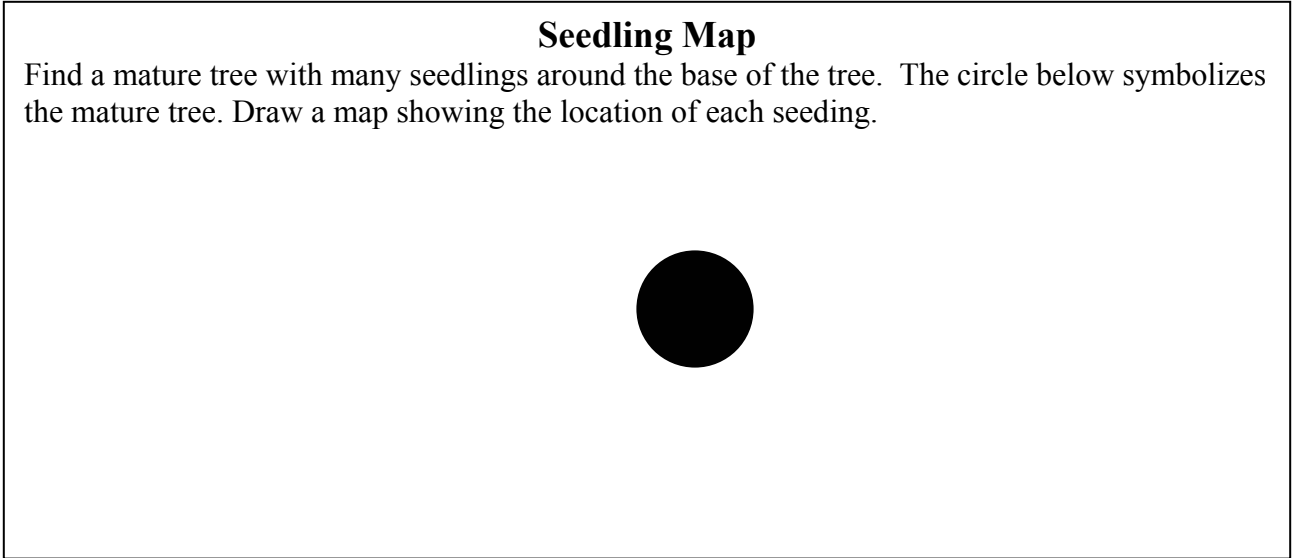

Which Direction

Draw a map in the space below that shows how to get back to the bus parking lot.



Seedling Map

Find a mature tree with many seedlings around the base of the tree. The circle below symbolizes the mature tree. Draw a map showing the location of each seedling.



My Favorite Part Map

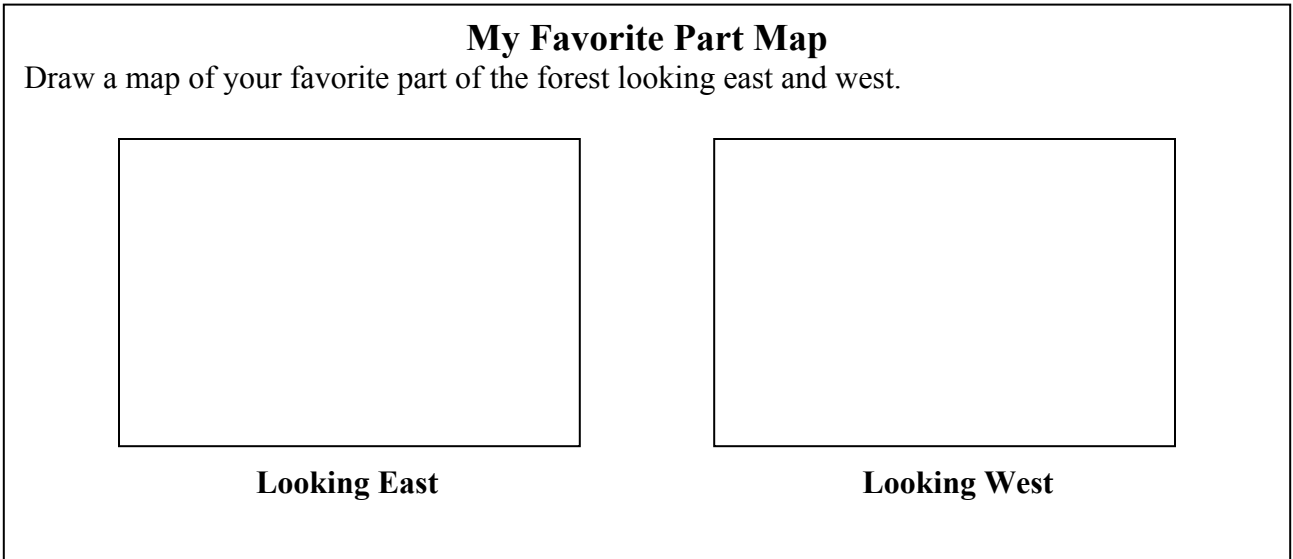
Draw a map of your favorite part of the forest looking east and west.



Looking East



Looking West



Map of My Day

Use the space below to draw a map of your day.

Journal

Journal
